

July 2016 Std - I Reeya Nam.

$$\square + \square + \square + \square + \square = \square$$

Maths. L-1, L-2. F.A. I

Total marks. 30.

Q.1 Part I. M.C.Q^s



1 The number name of 82 is

- a Eighteen (b) Twenty Eight
c Eight (d) Eighty two

2 The number name of 28 is

- a Eighty Two (b) Eighteen
c Twenty Eight (d) Eight

3 In 61 is :

- a 1 ten and 6 ones (b) 1 one and 6 tens
c 6 tens and 1 ones (d) All of these

4 In 70 is :

- (a) 7 tens 0 ones (b) 7 ones 0 tens
(c) 6 tens 8 ones (d) None of these

5 In 38 is :

- a 3 ones and 8 tens (b) 8 ones and 3 tens
c 3 Tens and 8 ones (d) All of these

NAME
ROLL NO.
DATE

$$\square - \square + \square + \square + \square + \square = \square$$

6 $3 \times 8 =$

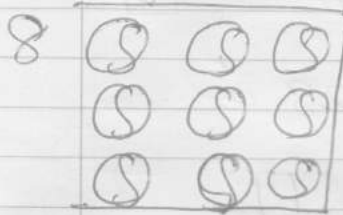
a 42 (b) 24

c 32 (d) 42



a First (b) second

c Fifth (d) Third



(a) 8 (b) 9

(c) 10 (d) 7

9 Forty

(a) 14 (c) 40

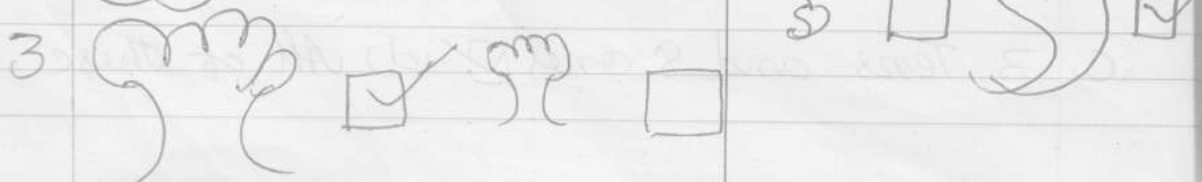
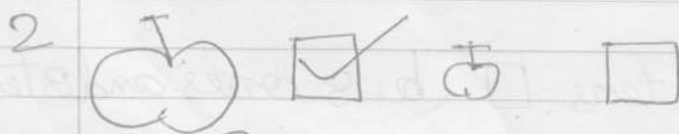
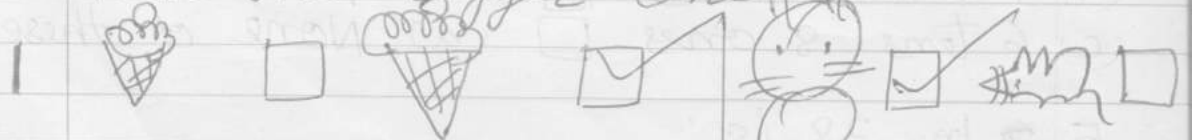
(b) 04 (d) 41

10 Fifteen

(a) 50 (b) 15

(c) 55 (d) 05


Q. 2 Tick the bigger one.



$$\square + \square + \square + \square + \square = \square$$

Q3 Arrange the ascending order.

① 9, 4, 8, 5, 3, 7, 2, 6
Ans 2, 3, 4, 5, 6, 7, 8, 9

② 

Ans



3 dog, rat, cow, cat
Ans rat, cat, dog, cow


Q4 Arrange the descending order

① 3, 9, 5, 4, 2, 1, 8, 7, 6

Ans 9, 8, 7, 6, 5, 4, 3, 2, 1

② rat, dog, cow, cat

Ans cow, dog, cat, rat

③ 

Ans



Q. 5 Write the number-name.

12 - Twelve	40 - Forty
20 - Twenty	11 - Eleven
15 - Fifteen	100 - Hundred
80 - Eighty	50 - Fifty

Q. 6 Fill the missing numbers.

1	2	3	4	5	6	7	8	9	10
11	12	13	14	15	16	17	18	19	20
21	22	23	24	25	26	27	28	29	30
31	32	33	34	35	36	37	38	39	40
41	42	43	44	45	46	47	48	49	50

Q. 7 Draw balls.

8 - ○○○○○○○○○

13 -

16 -

9 -

5 -

Q. 8 Count and write the correct nos.

○○○○○
○○○
7

△△△△△
△△△△△
△△△
13

♠♠♠♠♠
♠♠♠♠
5
10

Q. 9. Table of 1, 2, 3, 4, 5