


F-A-4 Maths paper / Revision VPS.
std 1st

 PHOENIX PUBLIC SCHOOL ISANPUR, AHMEDABAD - 382443.		Seat No. :																														
EXAM :	DATE :	<table border="1"> <thead> <tr> <th>Ques. No.</th> <th>Total Marks</th> <th>Marks Obtain</th> </tr> </thead> <tbody> <tr><td>1</td><td></td><td></td></tr> <tr><td>2</td><td></td><td></td></tr> <tr><td>3</td><td></td><td></td></tr> <tr><td>4</td><td></td><td></td></tr> <tr><td>5</td><td></td><td></td></tr> <tr><td>6</td><td></td><td></td></tr> <tr><td>7</td><td></td><td></td></tr> <tr><td>8</td><td></td><td></td></tr> <tr> <td colspan="2">TOTAL</td> <td></td> </tr> </tbody> </table>	Ques. No.	Total Marks	Marks Obtain	1			2			3			4			5			6			7			8			TOTAL		
Ques. No.	Total Marks		Marks Obtain																													
1																																
2																																
3																																
4																																
5																																
6																																
7																																
8																																
TOTAL																																
STD. / CLASS :	SUBJECT :																															
MAIN 1 + Supplements _____ = TOTAL _____																																
Supervisor's Sign.	Examiner's Sign.																															

Write From Here / અહીંથી લખજું.

F-A-4 Maths paper style. (1)

L-3, L-4 30 marks.

Part-A.

Q-1. M-C-Q. 10 marks.

Part-B

Q-1. Fill in the blanks. 5 marks

Q-2. Read and write time 5 marks

Q-3. Draw hands 5 marks

Q-4. Match currency 5 marks.

$\square + \square + \square + \square + \square = 8$

Part - A
M-C-Q.

1. How many months are there in a year?
ca) 10 cb) 14 cc) 12 cd) 8
2. How many days are there in a week?
 ca) 7 cb) 12 cc) 8 cd) 6
3. Which is the sixth month of a year?
ca) May cb) June cc) July cd) August
4. Which is the eleventh month of a year?
ca) November cb) October cc) June
cd) December
5. Which month has less than 30 days?
ca) February cb) March
cc) April cd) May
6. Christmas is celebrated in the month of ~~100~~ _____
ca) January cb) October
cc) December cd) November
7. How many days are in the month of February in a leap year?
ca) 28 cb) 27 cc) 30
cd) 29

□ + □ + □ + □ + □ = □

3

8 Which day comes before Tuesday?

(a) Wednesday
(c) Thursday

(b) Monday ✓
(d) Friday

9 Which month comes before July?

(a) August
(c) March

(b) June ✓
(d) October

10 Which day comes after Saturday?

(a) Sunday ✓
(c) Tuesday

(b) Friday
(d) Monday

11 Which day comes after Sunday?

(a) Saturday
(c) Tuesday

(b) Monday ✓
(d) Friday

12 Which month comes after March?

(a) January
(c) May

(b) February
(d) April ✓

13 How many days are there in the month of March?

(a) 30
(c) 28

(b) 31 ✓
(d) 29

14 1 Rupee = _____ Paise

(a) 50
(c) 10

(b) 100 ✓
(d) 20

15 What is the value of ₹ 2 × 1 = ?

(a) ₹ 3
(c) ₹ 4

(b) ₹ 1
(d) ₹ 2 ✓

2017
5th

4

16. What is the time when the small hand is at 9 and long hand at 12.
(a) 10 o'clock (b) 12 o'clock
(c) 9 o'clock ✓ (d) 7 o'clock
17. What is the time when the small hand is at 1 and long hand is at 12.
(a) 11 o'clock (b) 1 o'clock ✓
(c) 2 o'clock (d) 12 o'clock
18. December has _____ days.
(a) 30 (b) 31 ✓ (c) 28 (d) 29
19. A year has _____ Monday.
(a) 12 (b) 52 ✓
(c) 30 (d) 31
20. How many months end with the letter 'ber' ?
(a) 1 (b) 2
(c) 3 (d) 4 ✓

Part-13.

+ + + + = 5

Q-1. Fill in the blanks.

1. The value of ₹ 5 × 2 = ₹ 10

2. 100p = ₹ 1

3. What is today? _____

4. What is the 3rd day of the week? Tuesday

5. Sunday is fun day.

6. June has 30 days

7. In a leap year February has 29 days

8. There are 12 months in a year.

9. The eight month of the year is August.

10. The last month of the year is December.

11. Small hand is at 12 and long hand at 12 = 12 o'clock.

12. Which is the last day of week? Saturday.

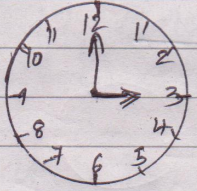
DATE: _____
PAGE: _____

Part 15

$$\square + \square + \square + \square + \square = \textcircled{6}$$

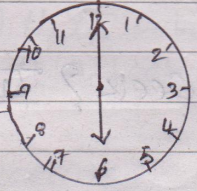
Q.2. Read and write the time.

1



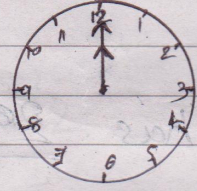
03:00

2



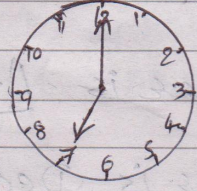
06:00

3



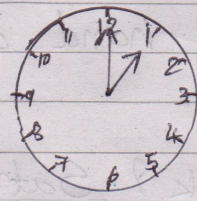
12:00

4



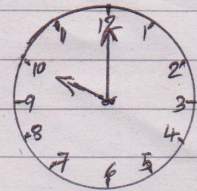
07:00

5



01:00

6



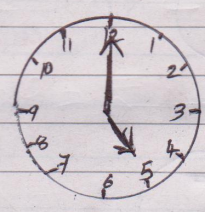
10:00

۲۲۲
۲۲۱۲۲

$\square + \square + \square + \square + \square = \square$ (7)

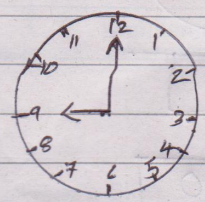
Q3 Draw hands 5m.

1



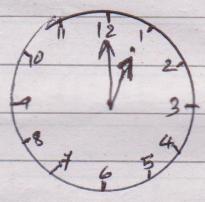
05:00

2



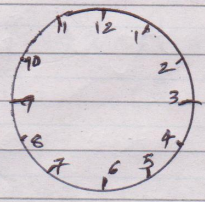
09:00

3



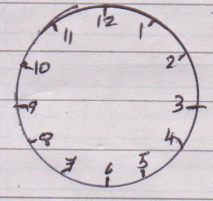
01:00

4



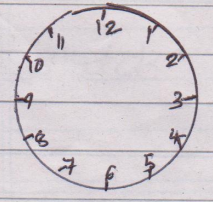
02:00

5



04:00

6



11:00

Q-4 Match the currency.

