

7/2/18  
પેપર નં  
ક્રમ નં

[ ] + [ ] + [ ] + [ ] + [ ] + [ ] = [ ]



 **VEDANT INTERNATIONAL SCHOOL**  
ISANPUR, AHMEDABAD - 382443.

Seat No. :  
બેઠક નંબર :

EXAM :  
પરીક્ષા :

DATE :  
તારીખ :

STD. / CLASS :  
ધોરણ / વર્ગ :

SUBJECT :  
વિષય :

MAIN મુખ્ય પુસ્તકો 1 + Supplements પુસ્તક પુસ્તકો = TOTAL કુલ

Supervisor's Sign.  
નિરીક્ષકની સહી

Examiner's Sign.  
પરીક્ષકની સહી


Ques. No.	Total Marks	Marks Obtain
1		
2		
3		
4		
5		
6		
7		
8		
TOTAL		

Write From Here / અહીંથી લખજું.

SA-I  
Revision - 2018-2019  
Science

Chapter - 1 to 7  
Std - 3<sup>rd</sup>

page No - [1 to 12]



Q. 1 MCQ

1) What do living things need for their growth?

- (a) food
- (b) space
- (c) House

Ans food

2) Which of these things is a living thing?

- (a) Computer
- (b) Car
- (c) Tree

Ans Tree

3) Which part of the plant is called the "Food Factory of the plant"?

- (a) Root
- (b) Leaf
- (c) Stem

Ans Leaf

4) Honey is made from \_\_\_\_\_

- (a) Sugarcane
- (b) Sugar
- (c) nectar

Ans nectar

5) Which of the following animals is a <sup>Carnivore</sup>?

- (a) Lion
- (b) Horse
- (c) Both (a) and (b)

2



5th

Ans Lion

6] Which of the following animals is an omnivore?

- [a] Frog [b] Bear [c] Earthworm

Ans Bear

7] Which of these animals swallows its food as a whole?

- [a] Elephant [b] Snake [c] Tiger

Ans Snake

8] Which of the following birds can fly, only a short distance?

- [a] Swallow [b] Pigeon [c] Peacock

Ans peacock

9] What does help a bird to change its direction during a flight?

- [a] Beak [b] Tail [c] Head

Ans Tail

2

3



10) Which of the following birds cannot fly?

- [a] kiwi [b] ostrich [c] both [a] and [b]

Ans both [a] and [b]

11) Which of the following birds spends most of its time in water?

- [a] duck [b] peacock [c] crow

Ans duck

12) Which of these birds is an example of perching bird?

- [a] Duck [b] Sparrow [c] penguin

Ans Sparrow

13) Which of the following birds is a preying bird?

- [a] Swan [b] vulture [c] parrot

Ans vulture

14) Which of the following birds has a short, hard and horny beak?

3



(a) Hawk (b) pigeon (c) parrot

Ans pigeon

5) Which of the following birds has webbed feet?

(a) parrot (b) Duck (c) vulture

Ans Duck

6) Which of these is an example of a non-living?

(a) ant (b) elephant (c) car

Ans car

7) Growing of a new plant from a seed is called \_\_\_\_\_

(a) germination (b) Stomata (c) chlorophyll

Ans germination

8) Which of the following plants has taproots?

(a) Balsam (b) mustard (c) both (a) and (b)

Ans Both (a) and (b)

9) Birds usually build their nests

(a)

415  
5  
□ + □ + □ + 5 + □ + □

In the month of \_\_\_\_\_

[a] February [b] August [c] December

Ans February

20] Which bird pecks a hole in the bark of a tree?

[a] Woodpecker [b] Parrot [c] Eagle

Ans Woodpecker

21] Which of these birds lives in very cold places?

[a] Tailorbird [b] Woodpecker [c] Penguin

Ans Penguin

22] How many bones does an adult human have?

(a) 200 (b) 300 (c) 206

Ans 206


23] The heart of an adult human beats about \_\_\_\_\_ times in a minute.

(a) 40-50 [b] 90-100 [c] 72-80

Ans 72-80

5

6



मान  
येसि मान  
कमिड

24] A group of similar kind of cells is called a/an —

- [a] organ [b] tissue [c] system

Ans tissue

25] Heart, blood and blood vessels from the — system.

- [a] Circulatory [b] excretory
- [c] nervous

Ans Circulatory

Q.2 fill in the blanks

1] Snakes use their bodies to crawl.

2] Human-beings breathe through their lungs.

3] Banana has soft and green stem.

4] The stem holds the plants upright.

5] Most of the fruits have seeds inside them.

6] Crow is an omnivore

6

24/4  
22/11/24  
24/11

+  +  +  +  =



# PHOENIX PUBLIC SCHOOL

ISANPUR, AHMEDABAD - 382443.

DATE:	SUBJECT:	Roll No.:
STD.:	Suppl. No.:	Supervisor's Sign./

- 7] A frog has a long and sticky tongue.
- 8] A Squirrel gnaws the food.
- 9] Most birds have four toes on each foot.
- 10] A parrot is an example of climbing.
- 11] The Penguin lives in very cold places.
- 12] The parent birds take good care of their babies.
- 13] Fresh air has more oxygen.
- 14] There are more than 640 muscles in an adult human's body.
- 15] There are five sense organs in our body.

## Q-3 True or false

- 1] Human beings, plants and animals are examples of non-living things. TF?

(F)



(8)

$$\square + \square + \square + \square + \square = \square$$

- 2) Fish breathe through their Gills [T]
- 3) Animals can make their food [F]
- 4) The Sunflowers always turns its face towards the moon. [F]
- 5) There are four types of roots [F]
- 6) Animals that eat flesh of ~~the~~ other animals are called Herbivores. [F]
- 7) Crocodiles and Snakes Swallow their foods as a whole. [T]
- 8) Aquatic birds have foul glands [F]
- 9) The tail helps the bird to fly. [T]
- 10) A Sunbird has a long, thin and pointed beak. [T]
- 11) The nest of a woodpecker swings in the breeze [F]
- 12) A tailorbird makes a hollow in a tree. [F]
- 13) A vulture makes its nest on the top of a tree. [T]

$$\square + \square + \square + \square + \square = \square$$

14] The owl does not make its nest. [F]

15] Do not cover your face while sleeping. [T]

Q-4 Name the following.

1] Name two living things.

Ans human beings, animals, plants.

2] Name two man-made non living things.

Ans car, train, bus, furniture, buildings, radio, television.

3] Name two taproot.

Ans carrot, hibiscus, balsam, mustard, pea.

4] Name two creepers.

Ans pumpkin and watermelon.

5] Name two stems.

Ans potato, onion, ginger and sugarcane.

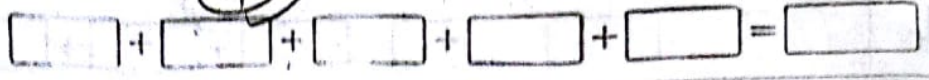
6] Name two Climbers.

Ans Grapevine, money plant, bougainvillea.

7] Name two leaves.

11/11/21  
2011/11/11  
11/11/21

19



Ans Cabbage, Coriander, Spinach.

8) Name two flowers.

Ans Sunflower, Marigold, Lotus, Rose.

9) Name two Herbivores animals.

Ans Cow, goat, sheep, buffalo, horse, monkey.

10) Name two Carnivores animals.

Ans Lion, Fox, wolf, Tiger, leopard.

11) Name two Omnivores animals.

Ans Crow, Bear, Cat.

12) Name two Aquatic birds.

Ans Duck, Crane, Swan, pelican.

13) Name two preying birds.

Ans Eagle, Vulture, owl, hawk.

14) Name two perching birds.

Ans Sparrow, Mynah, Crow.

15) Name two Climbing birds.  
Ans Wood pecker, Parrot.

24/11/2015

□ + □ 4 □ + □ + □ = □



# PHOENIX PUBLIC SCHOOL

ISANPUR, AHMEDABAD - 382443.

DATE :	SUBJECT :	Roll No. :
STD. :	Suppl. No. :	Supervisor's Sign./

Q-5 Answer the following questions

1) What does a fish use for swimming?

A) A fish uses its fins and tail for swimming.

2) What are the uses of flowers?

A) Flowers are used to make perfumes and decorate homes.

3) Name any five parts of a plant.

A) Root, stem, flower, leaf and fruit.

4) Name two animals which eat insects.

Ans Lizard and frog.

5) Name two flightless birds.

Ans penguin and ostrich

6) Name any three parts of a bird's body.

(11)

344  
221 224  
6215

$$\square + \square + \textcircled{12} + \square + \square = \square$$

Ans Beak, wings and tail

7) Which bird uses hollow space for its nest?

A) Woodpecker

8) Which bird makes its nest by sewing leaves together?

A) Tailorbird

9) Where do birds make nests?

A) Birds make their nests on trees.

10) Name any four organs involved in the digestive system.

A) Mouth, Stomach, Small intestine and large intestine.

12