



# PHOENIX PUBLIC SCHOOL

ISANPUR, AHMEDABAD - 382443.

©

DATE :	SUBJECT :	Roll No. :
STD. :	Suppl. No. :	Supervisor's Sign./

FA-4

V. P. S. [2015-16]

Std. I

Sub:- Maths

[Lesson-3,4]

Revision

Total Marks-30

Part-A

Q-1 M.C.Q.

10 Marks.

1) Which day comes before Tuesday?

(a) Wednesday (b) Monday ✓ (c) Thursday

2) How many days are in the month of February in a leap year?

(a) 28 (b) 30 ✓ (c) 29

3) How many months are there in a year?

(a) 10 (b) 14 (c) 12 ✓


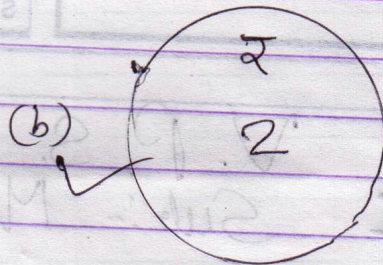
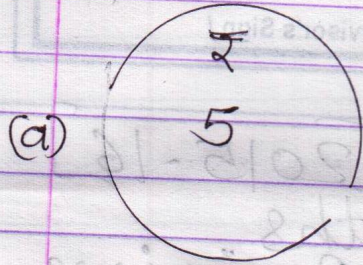
4) How many days are there in the month of March?

(a) 30 (b) 31 ✓ (c) 28


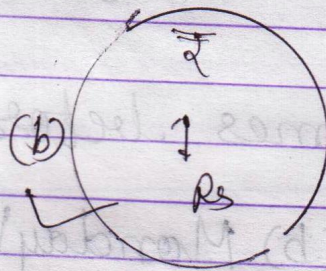
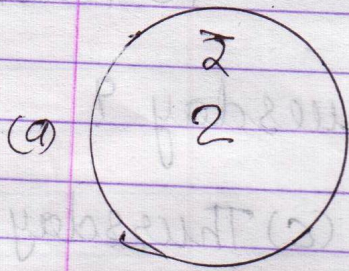
5) Which is the sixth month of a year?

(a) May (b) June ✓ (c) July

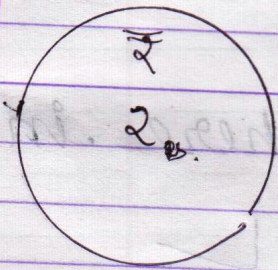
6) Tick (✓) the Rs. 2 in the following figures.



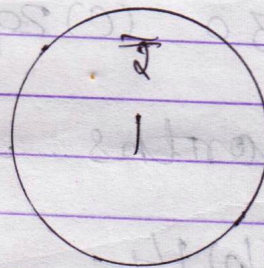
7) Tick (✓) the Rs. 1 coin in the following figures.



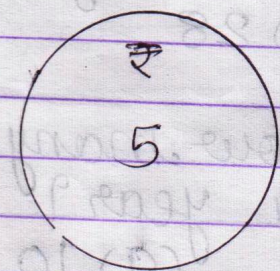
8) What is the total value of



+



+



(a) Rs 8 ✓

(b) Rs 9

(c) Rs 10

9) Which is the fourth month of a year.

(a) April ✓

(b) June

(c) March

10) Which month has less than 30 days?

(a) February ✓ (b) August (c) March

11) Which is the seventh month of a year?

(a) July ✓ (b) August (c) September

12) The third month of the year is

(a) January (b) March ✓ (c) April.

13) The last month of the year is

(a) December ✓ (b) January (c) April

14) Which is the first month of a year?

(a) January ✓ (b) February (c) March

15) The eighth month of the year is

(a) August ✓ (b) July (c) November

## Part - B

Q-1 Fill in the blanks.

1) June has 30 days.

2) In a leap year February has 29 days.

3) September has 30 days.

4) March has 31 days.


5) December has 31 days.

6) May has 31 days.

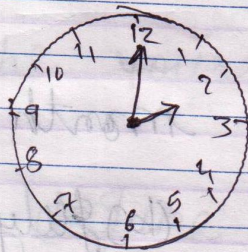
7) August has 31 days.

8) October has 31 days.

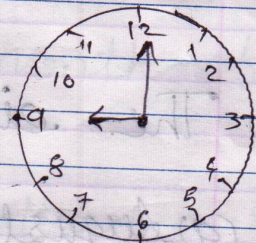
Q-2 Draw hands to show time.



[10:00]



[02:00]



[09:00]

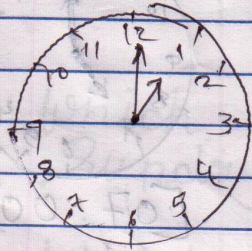


# PHOENIX PUBLIC SCHOOL

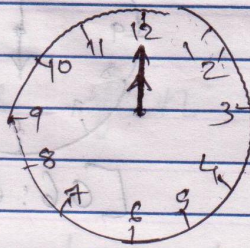
ISANPUR, AHMEDABAD - 382443.

DATE :	SUBJECT :	Roll No. :
STD. :	Suppl. No. :	Supervisor's Sign./

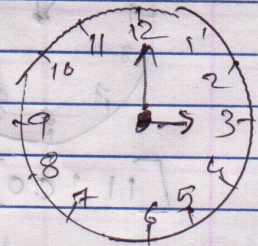
5



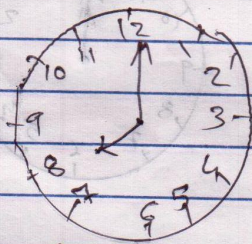
01:00



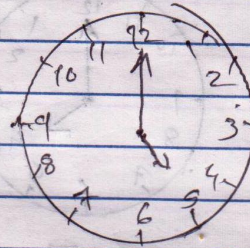
12:00



03:00



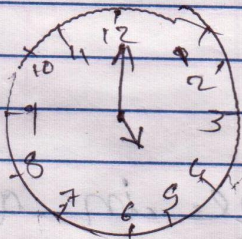
08:00




05:00

Q-3 Look at the clock and write the time.

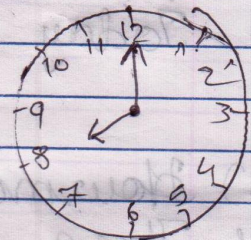
5



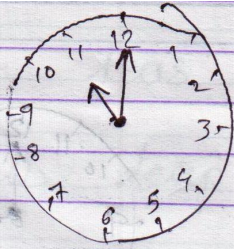
05:00




03:00



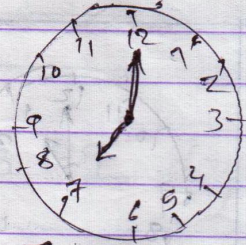
08:00




[11:00]



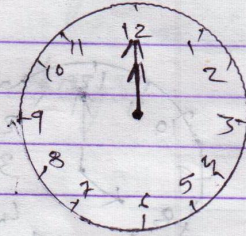
[06:00]



[07:00]



[04:00]



Q.4 Que | Ans

[5]

(1) What is today?

Ans Today is \_\_\_\_\_.

(2) How many days are there in a week?

Ans There are seven (7) days in a week. OR Seven

(3) Which day comes after Sunday?

Ans Monday

(4) Which day comes before Wednesday?  
Ans Tuesday

(5) What is the third day of the week?  
Ans Tuesday

(6) Which day is fun day?  
Ans Sunday

7) Which month has less than 30 days?

Ans. February.